

## Momentum and Impulse

### Questions

**Q1.**

A particle  $P$  of mass  $0.5$  kg is moving with velocity  $4\mathbf{j}$  m s<sup>-1</sup> when it receives an impulse  $\mathbf{I}$  Ns. Immediately after  $P$  receives the impulse, the velocity of  $P$  is  $(2\mathbf{i} + 3\mathbf{j})$  m s<sup>-1</sup>.

Find

- (a) the magnitude of  $\mathbf{I}$ , (4)
- (b) the angle between  $\mathbf{I}$  and  $\mathbf{j}$ . (2)

**(Total for question = 6 marks)**

**Q2.**

Two particles,  $P$  and  $Q$ , have masses  $2m$  and  $3m$  respectively. They are moving towards each other in opposite directions on a smooth horizontal plane when they collide directly. Immediately before they collide the speed of  $P$  is  $4u$  and the speed of  $Q$  is  $3u$ . As a result of the collision,  $Q$  has its direction of motion reversed and is moving with speed  $u$ .

- (a) Find the speed of  $P$  immediately after the collision. (3)
- (b) State whether or not the direction of motion of  $P$  has been reversed by the collision. (1)
- (c) Find the magnitude of the impulse exerted on  $P$  by  $Q$  in the collision. (3)

**(Total for question = 7 marks)**

**Q3.**

A particle  $P$ , of mass  $0.5 \text{ kg}$ , is moving with velocity  $(4\mathbf{i} + 4\mathbf{j}) \text{ m s}^{-1}$  when it receives an impulse  $\mathbf{I}$  of magnitude  $2.5 \text{ N s}$ .

As a result of the impulse, the direction of motion of  $P$  is deflected through an angle of  $45^\circ$

Given that  $\mathbf{I} = (\lambda\mathbf{i} + \mu\mathbf{j}) \text{ N s}$ , find all the possible pairs of values of  $\lambda$  and  $\mu$ .

**(Total for question = 9 marks)**

**Q4.**

A particle  $P$  of mass  $0.5 \text{ kg}$  is moving with velocity  $(4\mathbf{i} + 3\mathbf{j}) \text{ m s}^{-1}$  when it receives an impulse  $\mathbf{J} \text{ N s}$ . Immediately after receiving the impulse,  $P$  is moving with velocity  $(-\mathbf{i} + 6\mathbf{j}) \text{ m s}^{-1}$ .

(a) Find the magnitude of  $\mathbf{J}$ .

(4)

The angle between the direction of the impulse and the direction of motion of  $P$  immediately before receiving the impulse is  $\alpha^\circ$

(b) Find the value of  $\alpha$

(3)

**(Total for question = 7 marks)**

**Q5.**

A particle  $P$  has mass  $0.5 \text{ kg}$ . It is moving in the  $xy$  plane with velocity  $8\mathbf{i} \text{ m s}^{-1}$  when it receives an impulse  $\lambda(-\mathbf{i} + \mathbf{j}) \text{ N s}$ , where  $\lambda$  is a positive constant.

The angle between the direction of motion of  $P$  immediately before receiving the impulse and the direction of motion of  $P$  immediately after receiving the impulse is  $\theta^\circ$

Immediately after receiving the impulse,  $P$  is moving with speed  $4\sqrt{10} \text{ m s}^{-1}$

Find (i) the value of  $\lambda$

(ii) the value of  $\theta$

(8)

**(Total for question = 8 marks)**

**Q6.**

A particle  $A$  of mass  $3m$  and a particle  $B$  of mass  $m$  are moving along the same straight line on a smooth horizontal surface. The particles are moving in opposite directions towards each other when they collide directly.

Immediately before the collision, the speed of  $A$  is  $ku$  and the speed of  $B$  is  $u$ .  
Immediately after the collision, the speed of  $A$  is  $v$  and the speed of  $B$  is  $2v$ .

The magnitude of the impulse received by  $B$  in the collision is  $\frac{3}{2} mu$ .

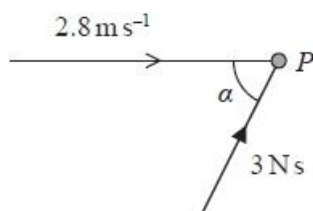
(a) Find  $v$  in terms of  $u$  only.

(3)

(b) Find the two possible values of  $k$ .

(5)

**(Total for question = 8 marks)**

**Q7.**

**Figure 2**

A particle  $P$  of mass  $0.5 \text{ kg}$  is moving in a straight line with speed  $2.8 \text{ m s}^{-1}$  when it receives an impulse of magnitude  $3 \text{ N s}$ .

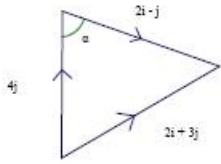
The angle between the direction of motion of  $P$  immediately before receiving the impulse and the line of action of the impulse is  $\alpha$ , where  $\tan \alpha = \frac{4}{3}$ , as shown in Figure 2.

Find the speed of  $P$  immediately after receiving the impulse.

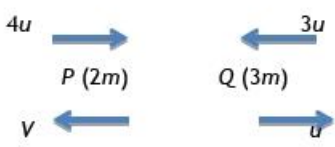
**(Total for question = 5 marks)**

**Mark Scheme – Momentum and Impulse**

Q1.

Q.	Scheme	Marks	Notes
<b>a</b>	$\mathbf{I} = 0.5(2\mathbf{i} + 3\mathbf{j}) - 0.5(4\mathbf{j})$	M1	Impulse-momentum equation. Dimensionally correct. Condone subtraction in wrong order.
	$(= 0.5(2\mathbf{i} - \mathbf{j}))$	A1	Correct unsimplified
	$ \mathbf{I}  = \frac{1}{2}\sqrt{2^2 + 1^2}$	M1	Correct method for modulus. Follow their I
	$= \frac{1}{2}\sqrt{5} (= 1.12)\text{Ns}$	A1	1.1 or better (from correct solution only)
		(4)	
<b>b</b>	$\tan^{-1}(\pm 2)$ or $\tan^{-1}\left(\pm \frac{1}{2}\right)$ or $\tan \theta = \pm 2$ or $\tan \theta = \pm \frac{1}{2}$ or equivalent	M1	Correct method for a relevant angle. Follow their I
	Required angle = $117^\circ$ ( $116.6^\circ$ or better)	A1	Accept $243^\circ$ ( $2.03$ rads)
		(2)	
<b>balt</b>			
	$\cos \alpha = \frac{16 + 5 - 13}{2\sqrt{5}\sqrt{16}} = \frac{1}{\sqrt{5}}$	M1	
	Required angle = $117^\circ$ ( $116.6^\circ$ )	A1	Accept $243^\circ$
		(2)	
		[6]	

Q2.


Question Number	Scheme	Marks
(a)	 <p style="text-align: center;"> <math>8mu - 9mu = -2mV + 3mu</math>  <math>V = 2u</math> </p>	M1 A1 A1 (3)
(b)	(Has been) reversed	B1 (1)
(c)	<p style="text-align: center;">For Q: <math>I = 3m(u - -3u)</math>  <math>= 12mu</math></p> <p style="text-align: center;">OR:</p> <p style="text-align: center;">For P: <math>I = 2m(2u - -4u)</math>  <math>= 12mu</math></p>	M1 A1 A1 (3) <b>OR</b> M1 A1 A1 (3) 7
<b>Notes</b>		
(a)	M1 for CLM with correct no. of terms, all dimensionally correct, to give an equation in $m$ , $u$ and their $V$ only. Condone consistent $g$ 's or cancelled $m$ 's. First A1 for a correct equation (they may have $+2mV$ ) Second A1 for $2u$ (must be positive since speed is required)	
(b)	B1 for '(has been) reversed'. <u>Only available if a correct velocity has been correctly obtained in part (a).</u> B0 for 'changed', 'direction has changed', 'yes'	
(c)	M1 for using Impulse = change in momentum of Q (must have $3m$ in both terms) (M0 if <i>clearly</i> adding momenta or if $g$ is included) but condone sign errors. First A1 for $3m(u - -3u)$ or $-3m(u - -3u)$ Second A1 for $12mu$ (must be positive since magnitude required) <b>OR</b> M1 for using Impulse = change in momentum of P (must have $2m$ in both terms) (M0 if <i>clearly</i> adding momenta) but condone sign errors. First A1 for $2m(2u - -4u)$ or $-2m(2u - -4u)$ Second A1 for $12mu$ (must be positive since magnitude required) N.B. Allow use of $I = 3m(u - v)$ or $I = 2m(u - v)$ since only magnitude required	

Q3.

Question	Scheme	Mark s	AOs	Notes
	Momentum of $P$ after impulse = $ai$ (or $ai$ )	B1	2.2a	Correct interpretation of angle of deflection (velocity or momentum a multiple of $i$ or $j$ )
<b>Either</b>	Use of $\mathbf{I} = m(\mathbf{v} - \mathbf{u})$ : $(\mathbf{I} =) 0.5(2ai - (4i + 4j)) = (a - 2)i - 2j$	M1	3.3	Form vector triangle or equation for $v$ or their $ai$
	Use of Pythagoras to form equation in $a$	M1	3.4	Use trigonometry or Pythagoras' theorem to form equation in $a$
	$6.25 = 0.25((2a - 4)^2 + 16)$ $(4a^2 - 16a + 7 = 0)$	A1ft A1	1.1b 1.1b	Unsimplified equation with at most one error. Follow their $ai$ Correct unsimplified equation
<b>Or</b>	$\lambda^2 + \mu^2 = \frac{25}{4}$	M1		
	$\mathbf{I} = \lambda\mathbf{i} + \mu\mathbf{j} = \frac{1}{2}((x - 4)\mathbf{i} - 4\mathbf{j})$	M1		
	$\mu = -2$	A1		Dependent on 2 <sup>nd</sup> M (for impulse)
	$\lambda^2 = \frac{9}{4}$	A1		

<b>Or</b>	Use of $\mathbf{I} = m(\mathbf{v} - \mathbf{u})$ to form vector triangle	M1	3.3	
	Form equation in their $a$	M1	3.4	
	$6.25 = a^2 + 8 - 2a\sqrt{8} \times \frac{1}{\sqrt{2}}$ $\left( 4 \times 6.25 = b^2 + 32 - 2b\sqrt{32} \times \frac{1}{\sqrt{2}} \right.$ <p style="text-align: center;">for velocity <math>bi</math>)</p> $(4a^2 - 16a + 7 = 0)$	A1ft A1	1.1b 1.1b	
	$a = \frac{7}{2}, \frac{1}{2}$ $\Rightarrow \mathbf{I} = \frac{3}{2}\mathbf{i} - 2\mathbf{j} \text{ (Ns)}$	M1	1.1b	Complete correct method to solve to find a pair of values for $\lambda$ and $\mu$
	<p style="text-align: center;">or</p> $\mathbf{I} = -\frac{3}{2}\mathbf{i} - 2\mathbf{j} \text{ (Ns)}$	A1	1.1b	Two correct pairs of values for $\lambda$ and $\mu$
	<p style="text-align: center;">or</p> $\mathbf{I} = -2\mathbf{i} - \frac{3}{2}\mathbf{j} \text{ (Ns)}$	M1	2.2a	Use symmetry in complete correct method to find one of the other pairs of values for $\lambda$ and $\mu$
	<p style="text-align: center;">or</p> $\mathbf{I} = -2\mathbf{i} + \frac{3}{2}\mathbf{j} \text{ (Ns)}$	A1	1.1b	All four correct pairs (They do not need to write out the impulse in full)
		<b>(9)</b>		
<b>(9 marks)</b>				

Q4.

Question	Scheme	Marks	AOs
a	Impulse-momentum equation	M1	3.1a
	$\mathbf{J} = 0.5(-\mathbf{i} + 6\mathbf{j} - 4\mathbf{i} - 3\mathbf{j})$ $(\mathbf{J} = 0.5(-5\mathbf{i} + 3\mathbf{j}))$	A1	1.1b
	Find magnitude of $\mathbf{J}$ :	M1	1.1b
	$ \mathbf{J} ^2 = \frac{1}{4}(25+9), \quad  \mathbf{J}  = \frac{\sqrt{34}}{2} \text{ (N s)}$	A1	1.1b
		(4)	
b			
	Correct use of trig	M1	3.1a
	$\alpha^\circ = 180^\circ - \tan^{-1} \frac{3}{4} - \tan^{-1} \frac{3}{5}$ or $\alpha^\circ = \tan^{-1} \frac{4}{3} + \tan^{-1} \frac{5}{3}$	A1ft	1.1b
	$\alpha = 112$	A1	1.1b
	(3)		
balt	Use scalar product of $\mu\mathbf{J}$ and $4\mathbf{i} + 3\mathbf{j}$ to find the angle	M1	3.1a
	$\cos \alpha^\circ = \frac{-20+9}{\sqrt{34} \times 5}$	A1ft	1.1b
	$\alpha = 112$	A1	1.1b
		(3)	
balt	Use of cosine rule in triangle of momenta or equivalent	M1	3.1a
	$\alpha^\circ = 180^\circ - \cos^{-1} \left( \frac{34+25-37}{2 \times 5 \times \sqrt{34}} \right)$	A1ft	1.1b
	$\alpha = 112$	A1	1.1b
		(3)	
			(7 marks)



Notes:	
(a)M1	Dimensionally correct. Must be subtracting, but condone subtracting in the wrong order.
A1	Correct unsimplified equation
M1	Correct application of Pythagoras to find the magnitude. (from $\pm J$ )
A1	2.9 or better (2.9154....) (from $\pm J$ )
(b)M1	Correct use of trig to find a relevant angle using $4i + 3j$ and their $J$ i.e. $\alpha^\circ$ or $180^\circ - \alpha^\circ$ Allow $\frac{ a \cdot b }{ a  b }$
Alft	Correct unsimplified expression for the required angle. Follow their $J$ A0 for $\frac{ a \cdot b }{ a  b }$ Do not ISW
A1	110 or better (112.166.....) or accept 247.8....°

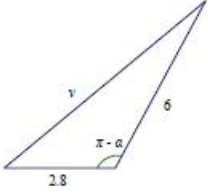
Q5.

Question	Scheme	Marks	AOs
	Use of Impulse = change in momentum	M1	3.1a
	$0.5(\mathbf{v} - 8\mathbf{i}) = \lambda(-\mathbf{i} + \mathbf{j})$ $(\mathbf{v} = (-2\lambda + 8)\mathbf{i} + 2\lambda\mathbf{j})$	A1	1.1b
	Use of Pythagoras:	M1	3.1a
	e.g. $160 = (-2\lambda + 8)^2 + (2\lambda)^2$ $(160 = 4\lambda^2 - 32\lambda + 64 + 4\lambda^2)$	A1	1.1b
	Form and solve quadratic in $\lambda$ : $8\lambda^2 - 32\lambda - 96 = 0$ $(\lambda^2 - 4\lambda - 12 = (\lambda - 6)(\lambda + 2) = 0)$	M1	2.1
	$\Rightarrow \lambda = 6$	A1	1.1b
	Find the required angle: $180^\circ - \tan^{-1} 3$	M1	1.1b
	$\theta = 108$	A1	2.2a
		(8)	
(8 marks)			
<b>Notes:</b>			
M1	Must be subtracting two values for momentum, but condone subtraction in the wrong order		
A1	Correct unsimplified equation		
M1	Correct use of final speed with their v		
A1	Correct unsimplified equation in one unknown or pair of simultaneous equations		
M1	Simplify and solve for $\lambda$ from correct working		
A1	Correct positive solution only		
M1	Complete method to solve for $\theta$		
A1	108 or better (108.4349....)		



Notes	
(a)M1	<p>Form impulse-momentum equation for <math>B</math> (or <math>A</math>).</p> <p>May be expressed as either <math>\mathbf{I} = m\mathbf{v} - m\mathbf{u}</math> or <math>\mathbf{I} + m\mathbf{u} = m\mathbf{v}</math>. Dimensionally correct.</p> <p>Must be considering difference in velocities</p> <p>Must have a correct combination of mass and velocity: pairing velocity of one with the mass of the other scores M0</p> <p>Allow for subtraction the wrong way round or impulse in the wrong direction.</p> <p>Assuming that you have not seen an incorrect formula stated, allow for <math>2v + u</math> without overt evidence of subtraction.</p> <p>Allow if the common factor of <math>m</math> is not seen</p>
A1	<p>Correct unsimplified equation for <math>B</math> (or <math>A</math>).</p> <p>Allow without <math>m</math></p>
A1	Correct answer only
(b) M1	<p>Correct method to form an equation in <math>k</math>. Must be dimensionally correct</p> <p>Condone sign errors in CLM.</p> <p>Allows marks for CLM equation here if seen in (a) and used correctly to find <math>k</math> here.</p> <p>Rules for impulse-momentum as above. M1 is available if they have not reversed the direction of the impulse. An equation which allows for the change in direction by using <math>\mathbf{u} - \mathbf{v}</math> can score full marks.</p> <p>Could be working with either option for the direction of motion of <math>A</math></p>
A1ft	Correct unsimplified equation in $u$ , $v$ or their $v$
A1	<p>One correct solution</p> <p>Be aware that a sign error in the impulse-momentum equation for <math>A</math> can lead to a fortuitous answer. A fortuitous answer scores A0</p> <p>(FYI the incorrect answers are <math>\frac{-7}{4}</math> and <math>\frac{1}{4}</math>)</p>
M1	Correct method to form a second equation in $k$ (reversing the direction of motion of $A$ )
A1	Second correct solution

Q7.

Question	Scheme	Marks	AOs
	Impulse momentum equation(s)	M1	3.1a
	$\begin{pmatrix} 3 \times \cos \alpha \\ 3 \times \sin \alpha \end{pmatrix} = \frac{1}{2} \begin{pmatrix} v_x - 2.8 \\ v_y \end{pmatrix} \quad \left( v_x = \frac{32}{5}, v_y = \frac{24}{5} \right)$	A1 A1	1.1b 1.1b
	$v = \frac{1}{5} \sqrt{32^2 + 24^2}$	M1	1.1b
	$= 8 \text{ (ms}^{-1}\text{)}$	A1	1.1b
	Alternative working parallel and perpendicular to the impulse: $\begin{pmatrix} 3 \\ 0 \end{pmatrix} = \frac{1}{2} \begin{pmatrix} v_1 - 2.8 \times \cos \alpha \\ v_2 \pm 2.8 \times \sin \alpha \end{pmatrix} \quad v_1 = 7.68, v_2 = \pm 2.24$ $v = \sqrt{7.68^2 + 2.24^2} = 8 \text{ (ms}^{-1}\text{)}$		
		(5)	
alt			
	Using cosine rule:	M1	
	$v^2 = 2.8^2 + 6^2 - 2 \times 2.8 \times 6 \cos(\pi - \alpha)$	A1 A1	
	Solve for v	M1	
	$v = 8 \text{ (ms}^{-1}\text{)}$	A1	
		(5)	
<b>(Total 5 marks)</b>			

Notes	
M1	Use of $\mathbf{I} = m\mathbf{v} - m\mathbf{u}$ in two dimensions. (i.e. resolving used) Dimensionally correct. Allow for a combined equation in vector format or for just one component. Condone sin/cos confusion. Allow if $m$ seen but not substituted.
A1 A1	Equation for one component correct unsimplified Equations for both components correct unsimplified Allow A1A1 for a correct unsimplified vector equation Allow A marks if in terms of $m$ and $a$
M1	Correct use of Pythagoras for their components to obtain the numerical value of the speed This may be seen or implied: an alert candidate might spot the 3, 4, 5 triangle.
A1	Correct only
Alt	
M1	Correct use of cosine rule in a dimensionally correct triangle. The lengths of the sides must be consistent, i.e. $v$ , 2.8 and 6 or $\frac{1}{2}v$ , 1.4 and 3 and it must be a correct vector triangle (vectors combined correctly)
A1 A1	Unsimplified equation with at most one error Correct unsimplified equation
M1	Substitute for trig. and solve for $v$
A1	Correct only